



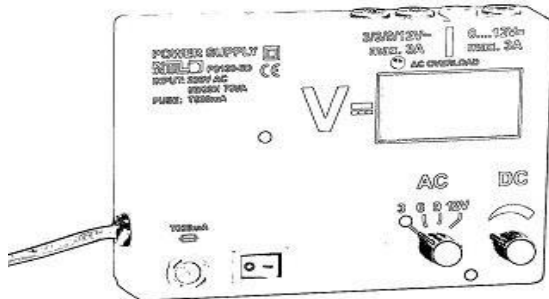
Welche Lampe leuchtet?

Überlege, welches Lämpchen wird leuchten und welches Lämpchen kann nicht leuchten?

Bau die Stromkreise nach

Kreuze **ja** an, wenn das Lämpchen leuchtet.

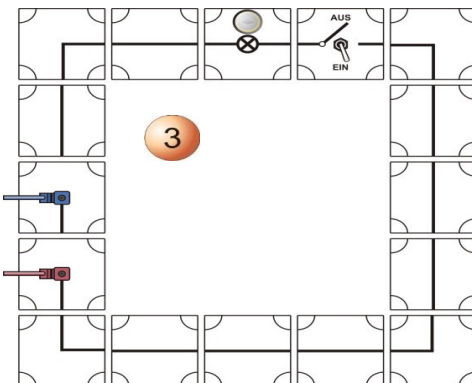
Suche den Fehler und Kreuze nein an, wenn es nicht leuchtet.



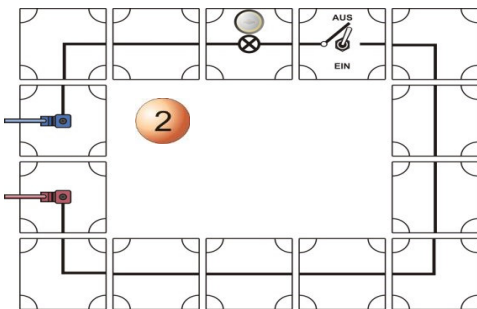
6 V=

	1	2	3	4	5	6	7	8	9
ja									
nein									

1

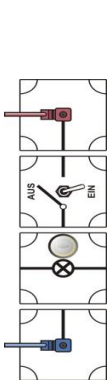


2

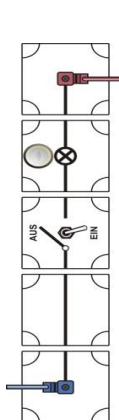


3

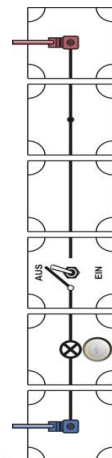
4



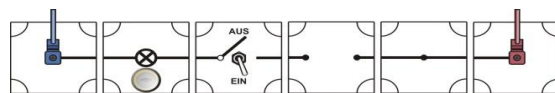
5



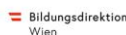
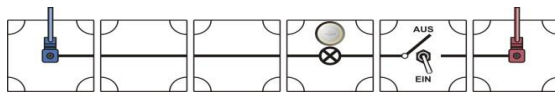
6



7



8





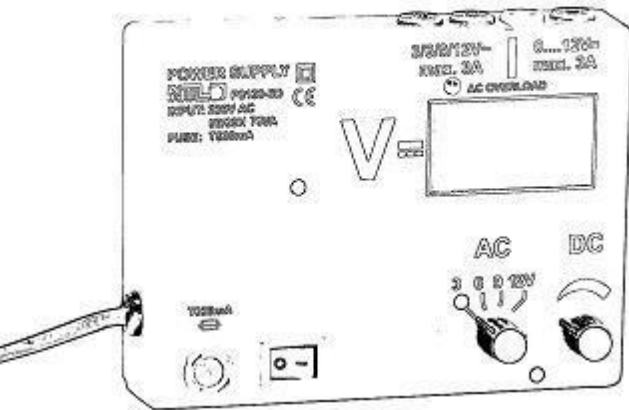
Interreg



Slovakia-Austria

European Regional Development Fund

Objavujeme čaro prírody a kúzlo techniky prostredníctvom jazykov



Ktorá žiarovka svieti?

Porozmýšľaj, ktorá žiarovka sa rozsvieti a ktorá nie.

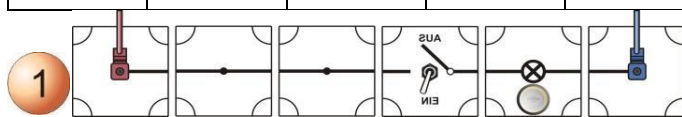
Postav obvody.

Zaškrtni *áno* v tabuľke, ak sa žiarovka rozsvieti.


Nájdí chybu a zaškrtni *nie*, ak sa žiarovka nerozsvieti.

6V


	1	2	3	4	5	6	7	8	9
áno									
nie									



2



3



MESTO SENICA

DEUTSCHE SCHULE BRATISLAVA



Bildungsdirektion Wien

Die Kinderfreunde WIEN

Land Burgenland

Bratislava NOVÉ MESTO

Objavujeme čaro prírody a kúzlo techniky prostredníctvom jazykov

